
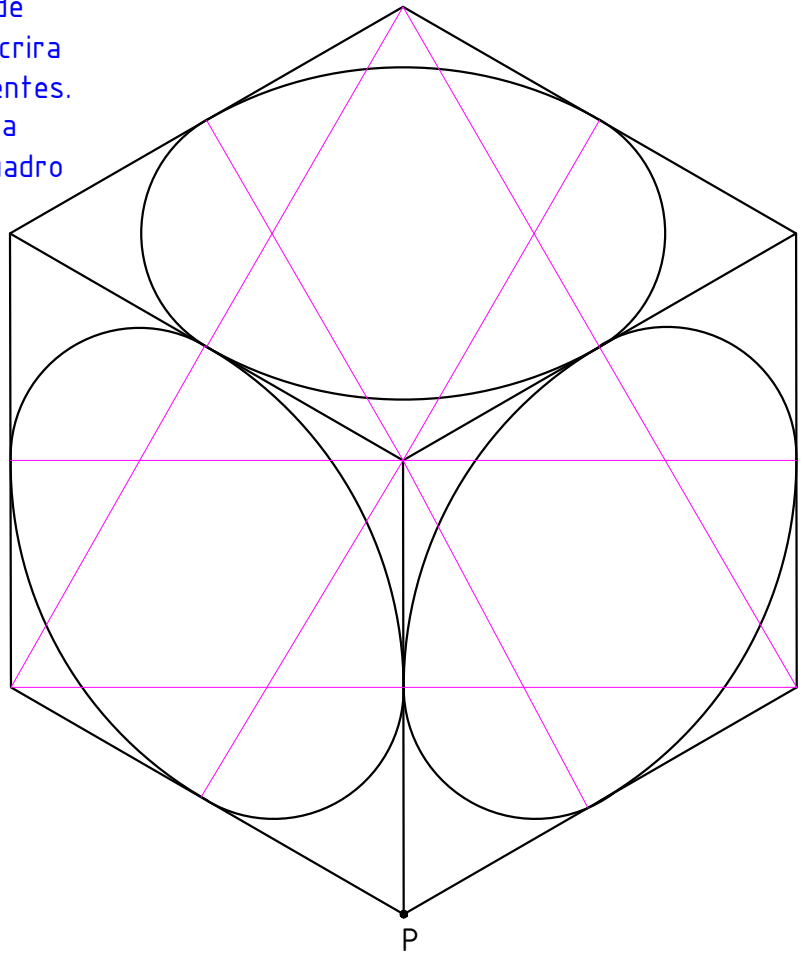
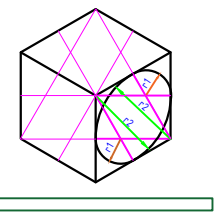
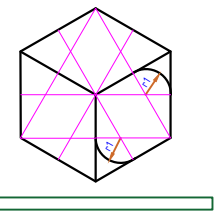
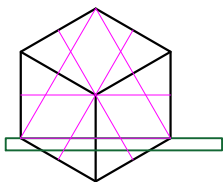
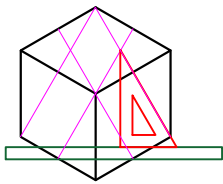
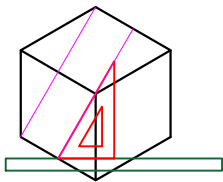
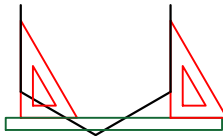
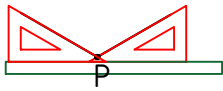


Desenhe o cubo de 60 milímetros de aresta, com uma circunferência inscrita em cada uma das três faces aparentes. Observe as etapas de construção da perspectiva isométrica, com o esquadro de 30° x 60° e régua paralela.



INSTITUTO FEDERAL
SANTA CATARINA
Campus São José

PERSPECTIVA ISOMÉTRICA COM ESQUADO
DE 30° x 60° E RÉGUA PARALELA

Refrigeração Climatização

Nome:

Turma:

Escala:

Data:

Folha n°: